



INDIAN SCHOOL SOHAR
PERIODIC TEST - I (2024-25)
SUBJECT –EVS
CLASS – III
SET –A

Date of Exam: 22/05/2024

Time Allotted: 40 Minutes

Max. Marks: 20

(Note: This question paper consists of 4 printed pages. Please check that you have all the pages.)

Name: _____

Roll No.: _____

Section: _____

GR No. _____

Subject Teacher's Sign with date

Invigilator's sign with date

Q1 . Choose and write the correct option in the given space:

(1×5=5)

i. Identify the thing that can feel changes in its surrounding.

A. Sunflower plant


C. Toys

B. Rocks

D. Sun

1. Answer: _____

ii. Look at the picture and name the organ of breathing for this animal.



2. Answer: _____

A. Air holes

C. Lungs

B. Gills

D. Stomata

iii. Name the substance which makes the leaves green.

A. Stomata

C. Petiole

B. Oxygen

D. Chlorophyll

3. Answer: _____

iv. Complete the following.

Grass : Fibrous root :: Mango : _____.

A. Main root

C. Tap root

B. Small root

D. Side root

4. Answer: _____

v. Choose the stem we can eat.

5. Answer: _____

- A. Ginger
- B. Cabbage
- C. Mango
- D. Carrot

Q2 . Study the two statements labelled as Assertion (A) and Reason (R).

Choose the correct answer from the options given below. (1×2=2)

- (a) Both assertion (A) and reason (R) are true and reason (R) is the correct explanation of assertion (A).
- (b) Both assertion (A) and reason (R) are true but reason (R) is not the correct explanation of assertion (A).
- (c) Assertion (A) is true but reason (R) is false.
- (d) Assertion (A) is false but reason (R) is true.

i. A – Leaves of Touch-me-not plant close on touching.
R – Plants cannot feel the changes around them.

ii. A - Climbers need support to grow.
R – Climbers have thin and weak stem.

Q3. Answer the following questions:

(1×3=3)

i. Give examples of any 2 fruits with one seed.

a. _____

b. _____

ii. Name the process by which all living things give birth to young ones.

iii. What is the name of the gas that plants use to prepare food?

Q4 . Answer the following questions in one or two sentences.

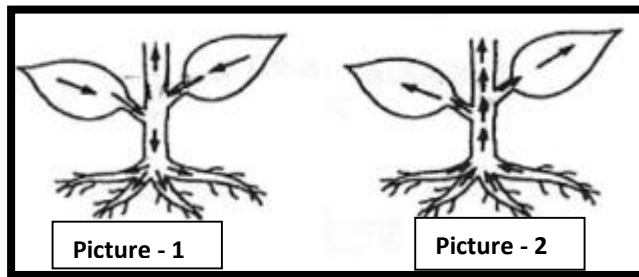
(2×2=4)

i . Write uses of roots. (2 points)

Ans. 1. _____

2. _____

ii . Study the given picture and name the two types of movements seen in the stem.



Ans. Picture -1. _____

Picture - 2. _____

Give reason: Plants do not move from one place to another in search of food.

Q5 . Answer the following questions.

(3×2=6)

i. Read the given passage and answer the following questions:

Plants are most important for us. They give us food, shade, oxygen etc. They can grow from seeds, stem leaves and roots. They need air, water and warmth to grow. Plant more and more plants to make our life happy.

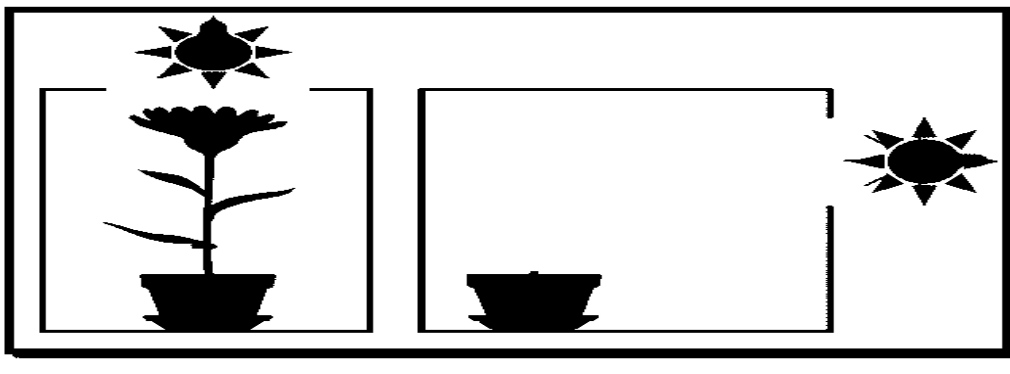
a. Define: Germination: _____

b. Write any two uses of a leaf.

1. _____

2. _____

c. Draw how plant will grow in figure B and get sunlight to make food.



ii. Draw neat diagram of a leaf.